


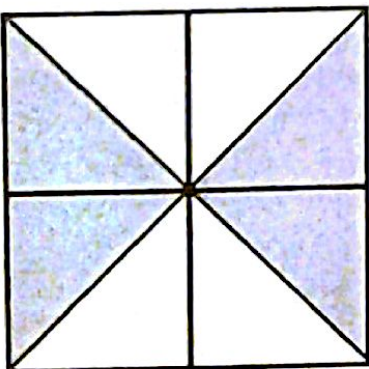
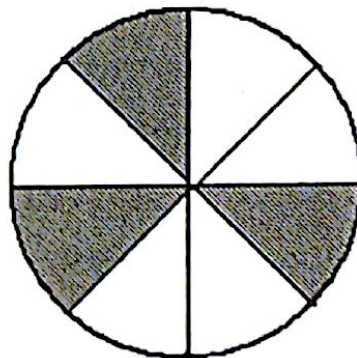
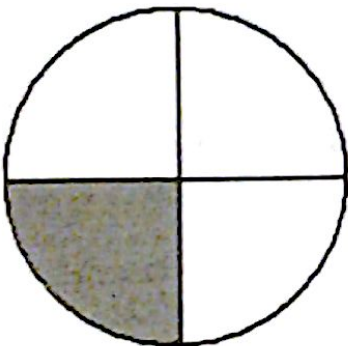
Name: _____

Writing a fraction.

NUMERATOR → How many

DENOMINATOR → The whole (total)

Write the fraction that corresponds to the picture.



Fractions

30

To add fractions, you must have a COMMON DENOMINATOR (the same bottom number).

Multiply by "1" to achieve this.

$$\frac{3}{4} + \frac{2}{7}$$

$$\frac{2}{21} + \frac{5}{7}$$

$$\frac{1}{6} + \frac{1}{5}$$

$$\frac{1}{4} + \frac{5}{6}$$